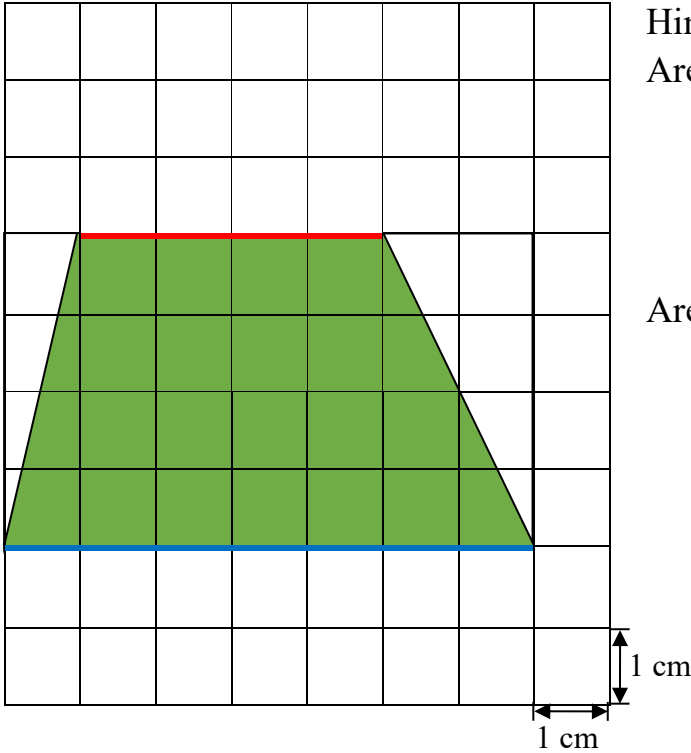





P5 Mathematics
Area of a trapezium
Worksheet (1)

Name: _____
Class: _____
Date: _____
Marks: _____

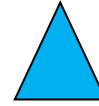
1. Find the area of the trapezium below.



Hints:
Area of parallelogram = Base \times Height



Area of triangle = $\frac{\text{Base} \times \text{Height}}{2}$



Show your work here.

Answer: _____ cm²

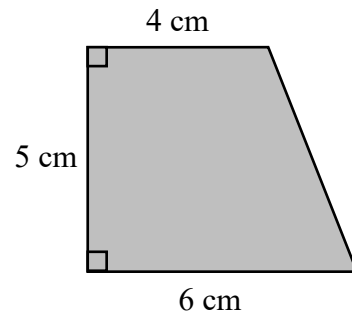
Do you know how to find the area of a trapezium?

Area of a trapezium =

2. Find the area of the trapezium on the right.

Answer: _____ cm^2

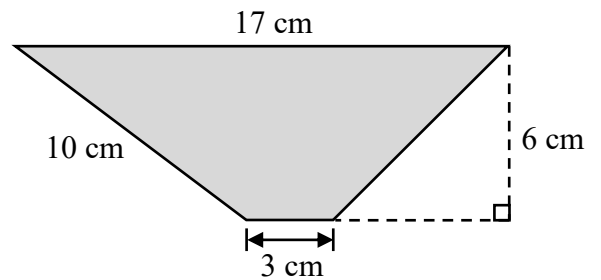
Show your work here.



3. Find the area of the trapezium on the right.

Answer: _____ cm^2

Show your work here.



4. Find the area of the trapezium on the right.

Answer: _____ cm^2

Show your work here.

