


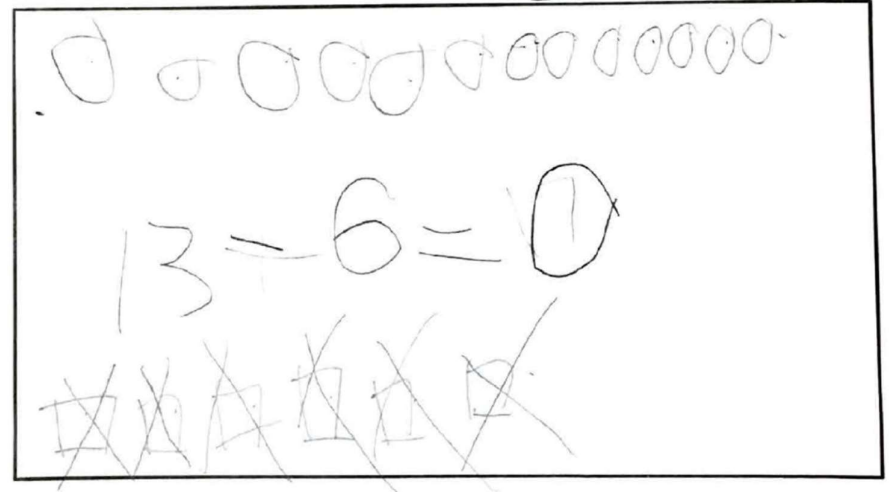
1. 思思寫了8個詞語後，再寫多4個，她共寫了詞語多少個？

10



A rectangular box containing a drawing of 8 triangles at the top. Below the triangles, the equation  $8 + 4 = 12$  is written. To the left of the equation, the number 0000 is written.


2. 農場裡原來有13隻鴨子，其中6隻游走了，還餘鴨子多少隻？



A rectangular box containing a drawing of 13 ducks at the top. Below the ducks, the equation  $13 - 6 = 7$  is written. Below the equation, there are several scribbled-out drawings of ducks.

3. 試畫圖或用文字說出一個用數式  $9 - 3$  去計算的故事。


10



A house-shaped box containing the equation  $9 - 3 = 7$  written in the top section. Below the equation are two horizontal dashed lines.

4. 試畫圖或用文字說出計算  $8 + 5$  的方法。

10



A house-shaped box containing the equation  $8 + 5 = 13$  written in the top section. Below the equation are two horizontal dashed lines.